

Chapter 19 Cumulative Practice Acids & Bases

1) List the equations that are used for pH calculations.

2) Use those equations to find the missing information in the following chart.

	[Solution]	[H ⁺]	pH	pOH	[OH ⁻]	Acidic/Basic?
a	0.5 M HCl					
b	____ M HCl		4.5			
c	____ M NaOH			6.5		
d	0.0015M NaOH					

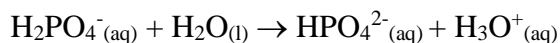
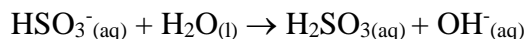
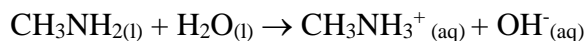
3) What is the **Arrhenius** definition?

- a) Acid -
- b) Base -

4) What is the **Brönsted-Lowry** definition?

- a) Acid -
- b) Base -

5) Identify the Acid, Base, Conjugate Acid, and Conjugate Base.

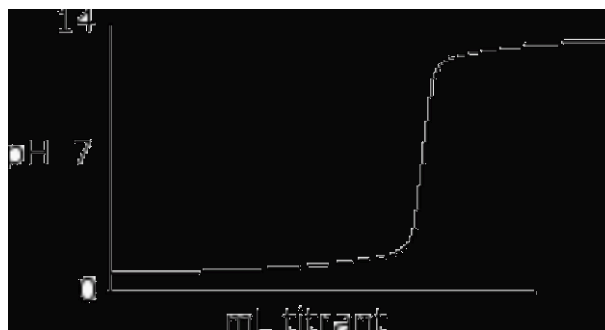


6) Explain which will have a lower pH, a 1.0 M solution of HCl or a 1.0 M solution of HC₂H₃O₂.

7) Why is HCl considered to be a stronger acid than HC₂H₃O₂?

8) Shown to the right is a titration curve:

A) Was the starting solution (Titrand) a strong/weak acid or a strong/weak base?



B) Was the solution added to it during the titration a strong/weak acid or a strong/weak base?

Chapter 19 Cumulative Practice
Acids & Bases

9) Shown to the right is a titration curve:

A) Was the starting solution (Titrand) a strong/weak acid or a strong/weak base?

B) Was the solution added to it during the titration a strong/weak acid or a strong/weak base?



10) Mark the equivalence point of each of the titration curves in questions #8 and #9. Explain why the equivalence point should be above seven, below seven, or equal to seven?

11) Identify each of the following compounds.

a) HNO_2	strong acid	weak acid	strong base	weak base	neutral
b) NaCl	strong acid	weak acid	strong base	weak base	neutral
c) $\text{Ca}(\text{OH})_2$	strong acid	weak acid	strong base	weak base	neutral
d) HI	strong acid	weak acid	strong base	weak base	neutral

12) What is the definition of the equivalence point of a titration?

13) What are you trying to find in a titration?

14) 50 mL of a solution of HBr is added to a flask along with a few drops of phenolphthalein indicator. When 30 mL of 0.50 M NaOH are added, the solution turns pink.

a) How many moles of OH^- were added?

b) How many moles of H^+ must have been present originally?

c) What was the concentration of the original HBr solution?

d) Should the pH at the equivalence point be above, below, or equal to seven?

15) 20 mL of a $\text{Ba}(\text{OH})_2$ solution are added to a flask along with a few drops of bromothymol blue indicator. When 43 mL of a 0.10 M $\text{HC}_2\text{H}_3\text{O}_2$ solution are added, solution changes from blue to yellow.

a) How many moles of H^+ were added?

b) How many moles of OH^- must have been present originally?

c) **CHALLENGE:** What was the concentration of the original $\text{Ba}(\text{OH})_2$ solution?

d) Was the pH at the equivalence point above, below, or equal to seven?