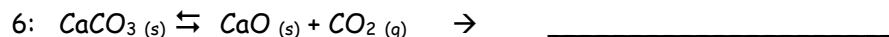
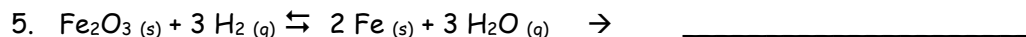
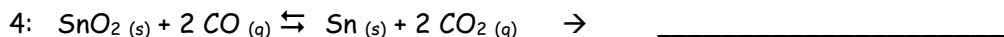
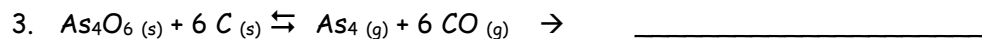
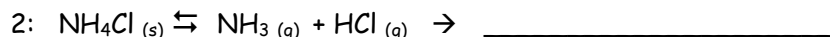


## EXTRA PRACTICE: Chemical Equilibrium Practice #2

Name: \_\_\_\_\_

Write the equilibrium expression (K) for the following reactions:



Balance each equation and then write the equilibrium expression (K) for each reaction:

