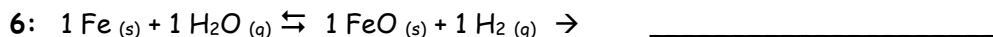

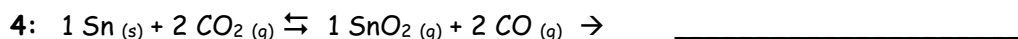
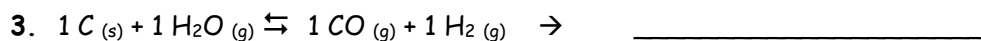
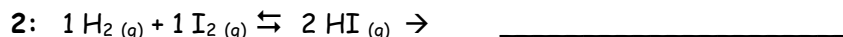



Chemical Equilibrium

Name: _____ Date: _____

Write the equilibrium expression (K) for the following reactions:



Balance each equation and then write the equilibrium expression (K) for each reaction:

